

Map 1 Exercise

Question and Answer

Look at the map called the Trail of Tears. Use the map to answer the questions below

1. How many trails can you find that make up the Trail of Tears?

2. Find the map key and identify the different types of trails.

How many of the trails are by land?_____By water?_____

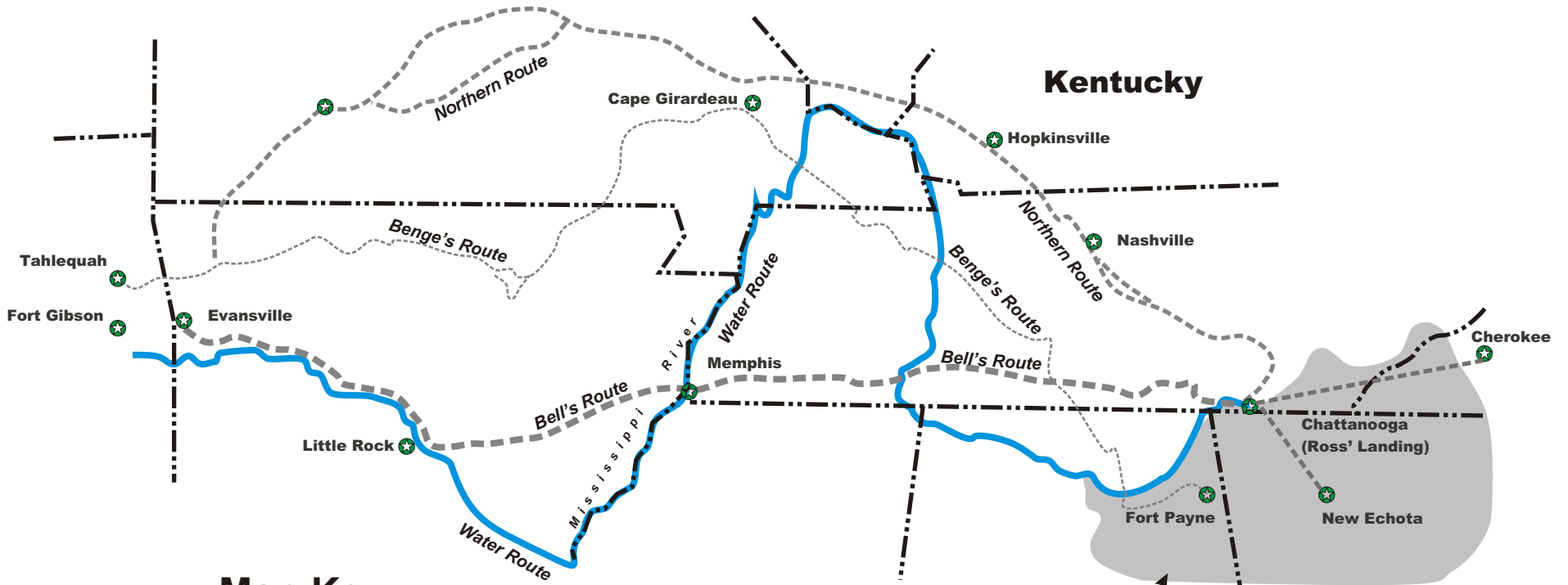
3. Trace over each trail on the map, using a different color for each trail type.
4. Identify the state boundaries on the map. Now write out the name of each state within the correct state boundary.
5. How many states do the trails pass through?_____

Matching





See if you can guess the approximate time it would take to travel the 2200 miles of the Trail of Tears with the different types of transportation. Use a different color line to make your matches. Use other resources in your classroom or in your home to help you with you find the correct match.

| | |
|-----------------|-------------|
| Foot | 4 1/2 days |
| Boat | 90 days |
| Auto | 4 1/2 hours |
| Horse | 4 months |
| Train | 3 months |
| Airplane | 3 days |

Map 1: Trail of Tears



Map Key

| | |
|---|------------------|
|  | State Boundary |
|  | Land Route |
|  | Water Route |
|  | Indian Territory |

Area Ceded with Treaty of New Echota